

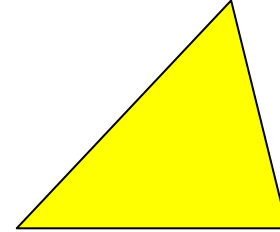

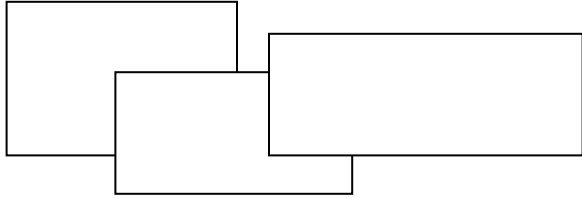


Area



Area of a Rectangle

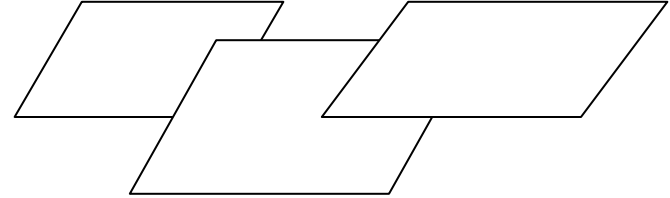


Write the definition of a rectangle

Write in words how to find the area of a rectangle.

Write the formula for the area of a rectangle.

Area of a Parallelogram

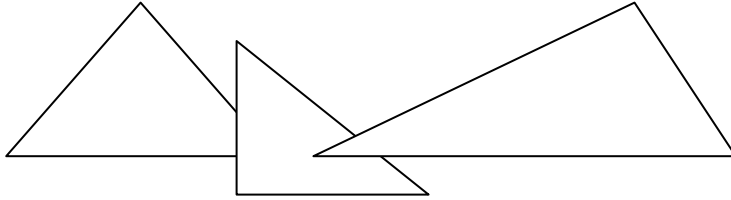


Write the definition of a parallelogram.

Write in words how to find the area of a parallelogram.

Write the formula for the area of a parallelogram.

Area of a Triangle

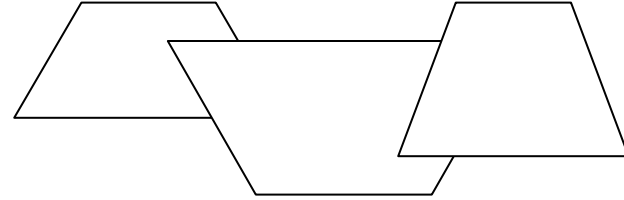


Write the definition of a triangle.

Write in words how to find the area of a triangle.

Write the formula for the area of a triangle.

Area of a Trapezoid

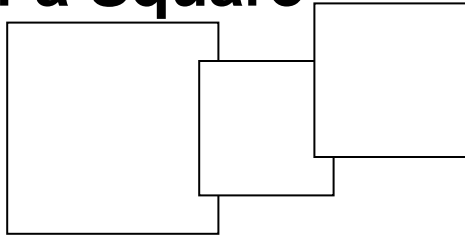


Write the definition of a trapezoid.

Write in words how to find the area of a trapezoid.

Write the formula for the area of a trapezoid.

Area of a Square

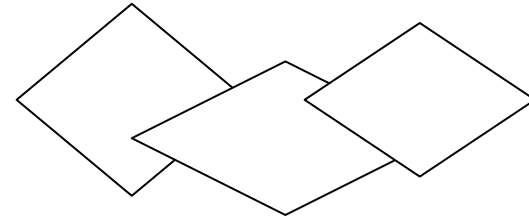


Write the definition of a square.

Write in words how to find the area of a square.

Write the formula for the area of a square.

Area of a Rhombus



Write the definition of a rhombus.

Write in words how to find the area of a rhombus.

Write the formula for the area of a rhombus.