

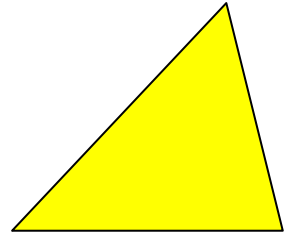
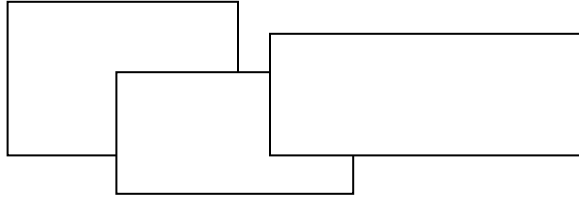


**Area**



# Area of a Rectangle

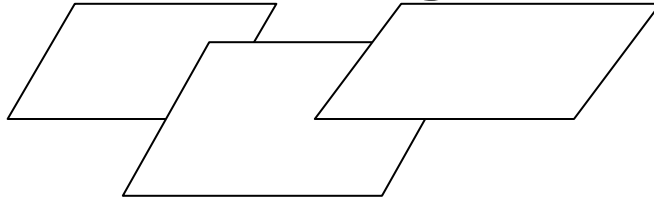


Write the definition of a rectangle.

Write in words how to find the area of a rectangle.

Write the formula for the area of a rectangle.

# Area of a Parallelogram

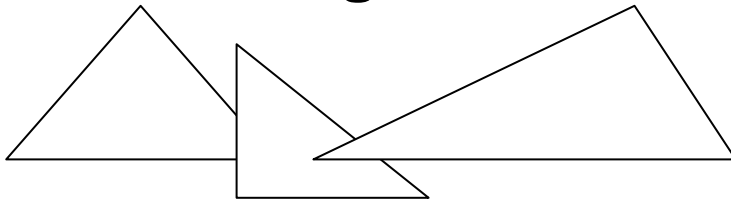


Write the definition of a parallelogram.

Write in words how to find the area of a parallelogram.

Write the formula for the area of a parallelogram.

# Area of a Triangle

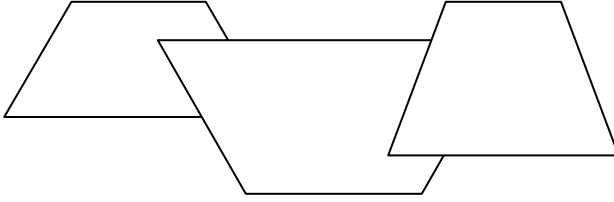


Write the definition of a triangle.

Write in words how to find the area of a triangle.

Write the formula for the area of a triangle.

# Area of a Trapezoid

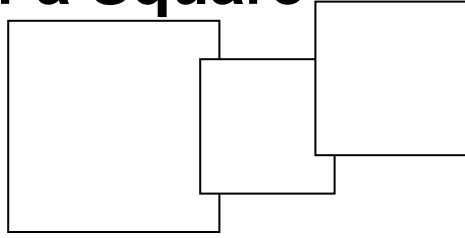


Write the definition of a trapezoid.

Write in words how to find the area of a trapezoid.

Write the formula for the area of a trapezoid.

# Area of a Square

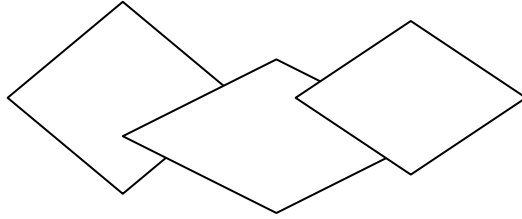


Write the definition of a square.

Write in words how to find the area of a square.

Write the formula for the area of a square.

# Area of a Rhombus



Write the definition of a rhombus.

Write in words how to find the area of a rhombus.

Write the formula for the area of a rhombus.